



Ik kan zien welke plattegrond (met hoogtegetallen) bij welk bouwsel hoort

a



3	3	1
3	1	1
3	1	0

b



3	3	3
3	3	2
3	2	1

Ik kan handig rekenen

$59 - 30 =$

$59 - 29 =$

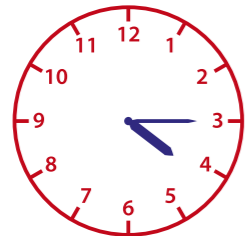
$78 - 60 =$

$78 - 58 =$

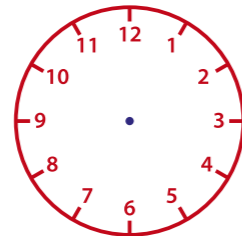
$36 - 20 =$

$36 - 17 =$

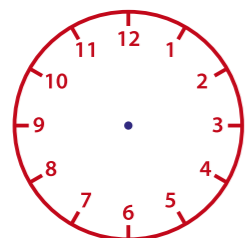
Ik kan de wijzers tekenen



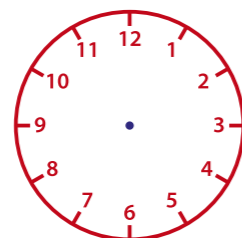
kwart over 4



kwart voor 8



half 7



kwart voor 7

Boek 4b blok 2: Schateiland



Ik ken de tafels van 3, 4 en 5



- 8 boeken € ...
- 3 boeken € ...
- 6 boeken € ...
- 7 boeken € ...
- 9 boeken € ...



- 4 pakken stiften € ...
- 7 pakken stiften € ...
- 9 pakken stiften € ...
- 5 pakken stiften € ...
- 6 pakken stiften € ...

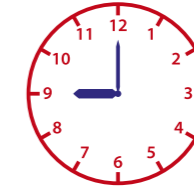
Ik kan zien hoe laat het is (analoog en digitaal)



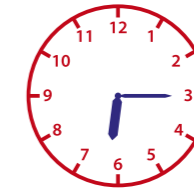
kwart over 6



16:00



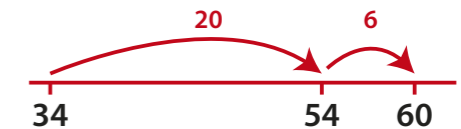
half 12



09:00

Ik kan optellen (tot 100)

$34 + 26 =$



$34 + 26 =$

$14 + 82 =$

$23 + 15 =$

$50 + 26 =$

$48 + 20 =$

$77 + 13 =$

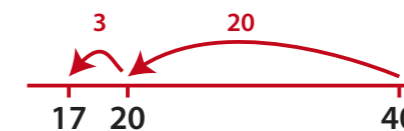
$40 + 53 =$

$57 + 30 =$

$13 + 17 =$

$60 + 38 =$

Ik kan aftrekken (tot 100)



$40 - 23 =$

$40 - 23 =$

$84 - 34 =$

$68 - 20 =$

$82 - 13 =$

$90 - 56 =$